

16.07.2021

WALT: Round to the nearest 10 and 100

Vocabulary

round

place value



Prior learning:

What do you already know about rounding?

Why is rounding useful?

What representations can you use to help you round?

## *When and how do we use rounding in real life?*

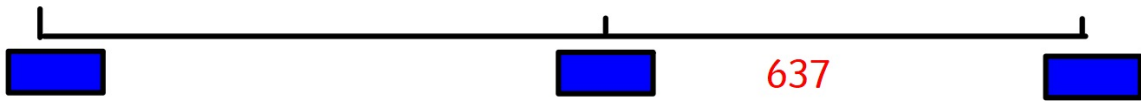


*When would it be appropriate to round to the nearest 10?*

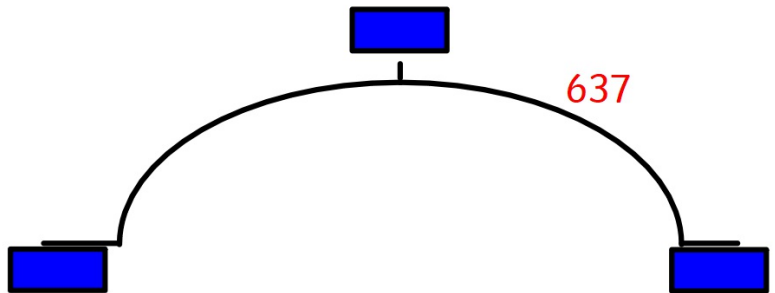
*When would it be appropriate to round to the nearest 100?*

Rounding to the nearest 10

<b>M</b> Millions 1 000 000	<b>Hth</b> Hundred Thousands 100 000	<b>Tth</b> Ten Thousands 10 000	<b>Th</b> Thousands 1000	<b>H</b> Hundreds 100	<b>T</b> Tens 10	<b>O</b> Ones 1	
					6	3	7



< 637 <



## Rounding to the nearest 10

Identify the previous multiple of ten and the next multiple of ten

What is the value of the 1s column?

Round up if the 1s column is 5 or over; round down if the 1s column is 4 or less

The answer will always have a zero in the 1s column

<b>M</b>	<b>Hth</b>	<b>Tth</b>	<b>Th</b>	<b>H</b>	<b>T</b>	<b>O</b>
Millions	Hundred Thousands	Ten Thousands	Thousands	Hundreds	Tens	Ones
1 000 000	100 000	10 000	1000	100	10	1

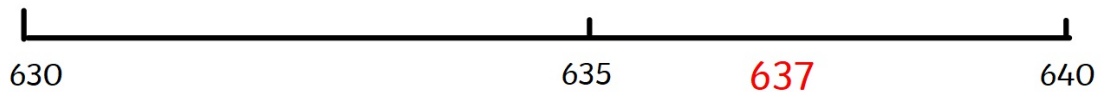
Round to the nearest 10:

873

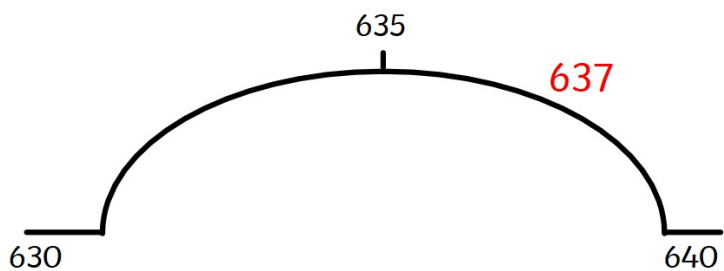
421

585

1843

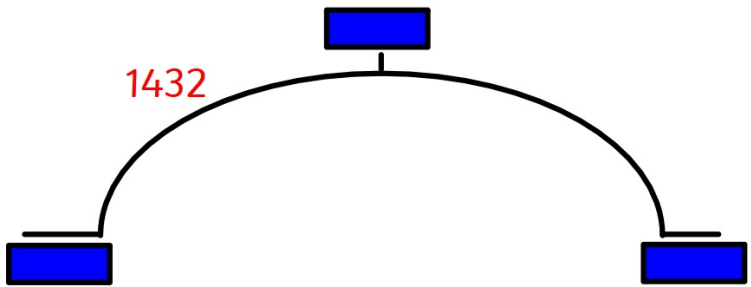
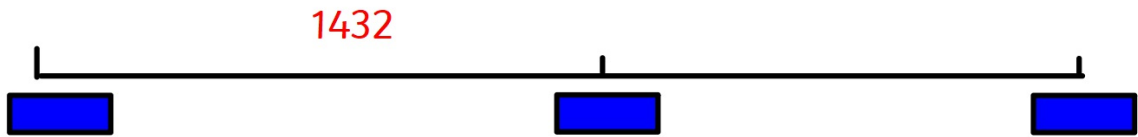


$$630 < 637 < 640$$



Rounding to the nearest 100

<b>M</b>	<b>Hth</b>	<b>Tth</b>	<b>Th</b>	<b>H</b>	<b>T</b>	<b>O</b>
Millions	Hundred Thousands	Ten Thousands	Thousands	Hundreds	Tens	Ones
1 000 000	100 000	10 000	1000	100	10	1
			1	4	3	2



## Rounding to the nearest 100

<b>M</b>	<b>Hth</b>	<b>Tth</b>	<b>Th</b>	<b>H</b>	<b>T</b>	<b>O</b>
Millions	Hundred Thousands	Ten Thousands	Thousands	Hundreds	Tens	Ones
1 000 000	100 000	10 000	1 000	100	10	1

Identify the previous multiple of hundred and the next multiple of hundred

What is the value of the 10s column?

Round up if the 10s column is 5 or over, round down if the 10s column is 4 or less

The answer will always have a zero in the 1s and 10s column

Round to the nearest 100:

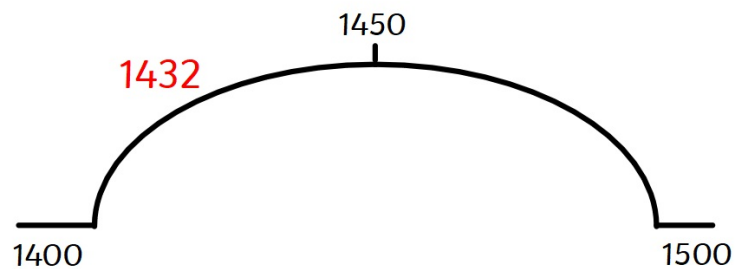
1873

7585

12,843



$$1400 < 1432 < 1500$$



<b>M</b>	<b>Hth</b>	<b>Tth</b>	<b>Th</b>	<b>H</b>	<b>T</b>	<b>O</b>
Millions	Hundred Thousands	Ten Thousands	Thousands	Hundreds	Tens	Ones
1 000 000	100 000	10 000	1000	100	10	1

Helen rounds 5602 to the nearest 100.  
She believes the answer is '600'.  
Do you agree? Explain why.

Hinge Question:

6548 rounded to the nearest 100 is...

A. 6,600

B. 6,500

C. 6,550

D. 7,000

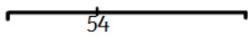
E. I don't know **yet**

Th Thousands 1000	H Hundreds 100	T Tens 10	U Units 1
6	5	4	8

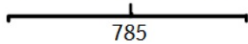


## Try it

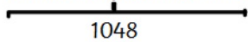
1. What is the previous and next multiple of 10



What is the previous and next multiple of 10



What is the previous and next multiple of 100



What is the previous and next multiple of 100



### **Rounding to the nearest 10:**

Identify the previous multiple of ten and the next multiple of ten

What is the value of the 1s column?

Round up if the 1s column is 5 or over; round down if the 1s column is 4 or less

The answer will always have a zero in the 1s column

### **Rounding to the nearest 100:**

Identify the previous multiple of hundred and the next multiple of hundred

What is the value of the 10s column?

Round up if the 10s column is 5 or over; round down if the 10s column is 4 or less

The answer will always have a zero in the 1s and 10s column

2. Round 84,516

to the nearest 10

to the nearest 100

3. For each number, find five numbers that round to it when rounding to the nearest 100

300

10,000

8,900

4. Complete the table.

Start Number	Nearest 10	Nearest 100
365		
1,242		
	4,770	

## Use it

1. A venue holds 3,278 fans for a concert. Rounded to the nearest 100, how many people can the venue hold?
2. A football stadium holds 65,218 fans. Rounded to the nearest 100, how many people can it hold?

### **Rounding to the nearest 10:**

Identify the previous multiple of ten and the next multiple of ten

What is the value of the 1s column?

Round up if the 1s column is 5 or over, round down if the 1s column is 4 or less

The answer will always have a zero in the 1s column

### **Rounding to the nearest 100:**

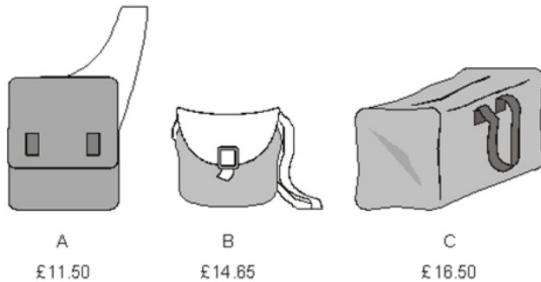
Identify the previous multiple of hundred and the next multiple of hundred

What is the value of the 10s column?

Round up if the 10s column is 5 or over, round down if the 10s column is 4 or less

The answer will always have a zero in the 1s and 10s column

3. Here are three bags in a shop



How much does bag B cost to the nearest pound?



Here are four digit cards. Make two different numbers that round to 200 when rounding to the nearest 100.

## Prove it

2,567 to the nearest 100 is 2,500



Whitney

Do you agree with Whitney?  
Explain why.

### REASONING 3



If I round 347 to the nearest 100, the answer is 400 because a 7 always rounds up!



### REASONING 2

A number is rounded to the nearest 10 and the answer is 30.



There are 5 possible answers:  
30, 31, 32, 33 and 34.

Do you agree with Marlon?

My number is 1,350 when rounded to the nearest 10



Mo



Rosie

My number is 1,400 when rounded to the nearest 100

Both numbers are whole numbers.

What is the greatest possible difference between the two numbers?